

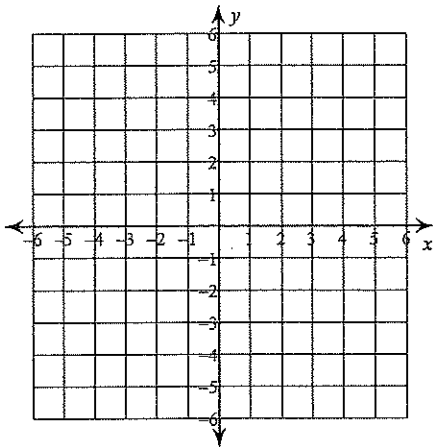
ASSIGN #10

SOLVE + GRAPH INEQS.
2 VARIABLES

NAME:

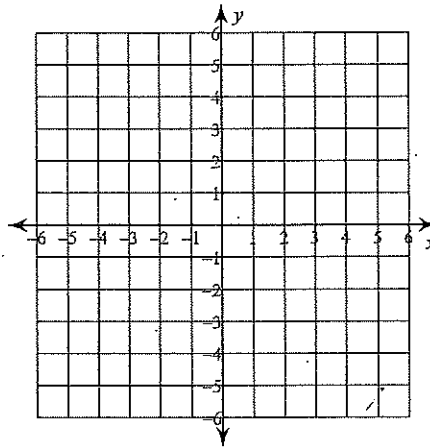
MP 2 ALGEBRA A-REL.A-1

9) $3x - 2y < 10$



$m =$
 $b = (0,)$

10) $5x - 3y \leq -15$

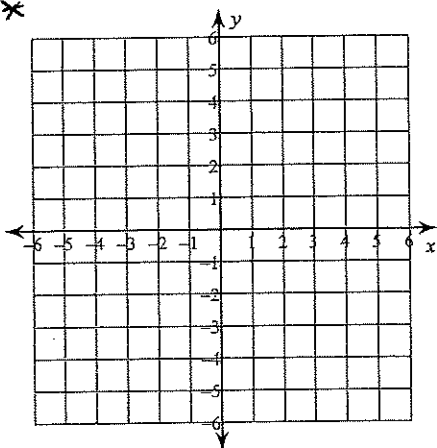


$m =$
 $b = (0,)$

**

11) $y \geq 4$

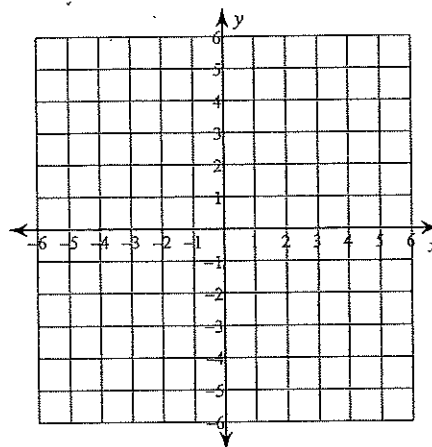
**



$m =$

$b = (0,)$

12) $x - y > 2$



$m =$

$b = (0,)$