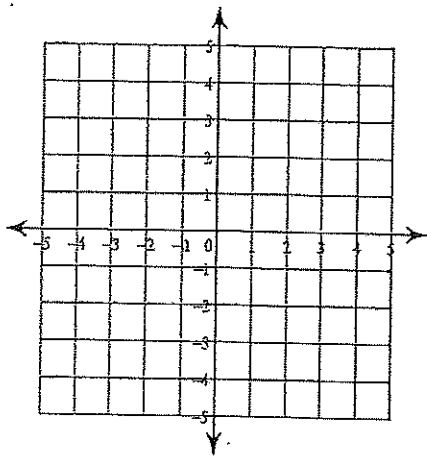


ASSIGNMENT #13 MP2 SYSTEMS OF INEQUALITIES

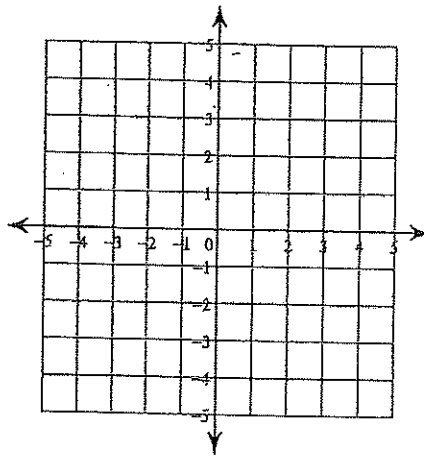
NAME:

Sketch the solution to each system of inequalities.

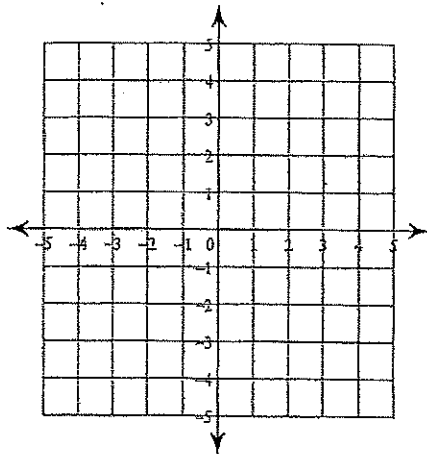
1) $y > 4x - 3$
 $y \geq -2x + 3$



2) $y \geq -5x + 3$
 $y > -2$



3) $y < 3$
 $y \leq -x + 1$



4) $y \geq x - 3$
 $y \geq -x - 1$

