

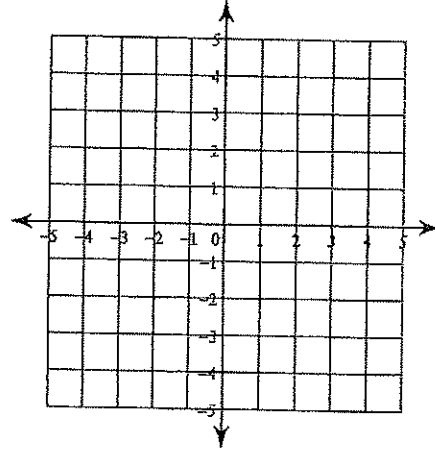
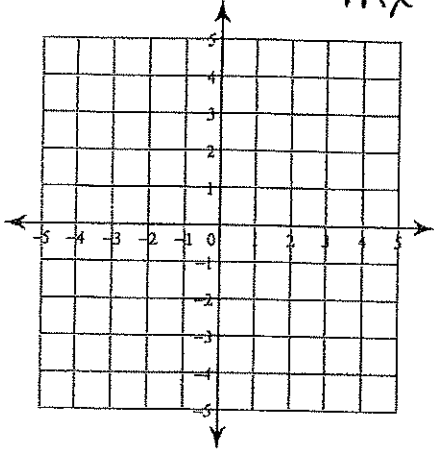
Assign #14 mp 2  
ALGEBRA

SYSTEMS  
OF  
INEQUALITIES NAME:

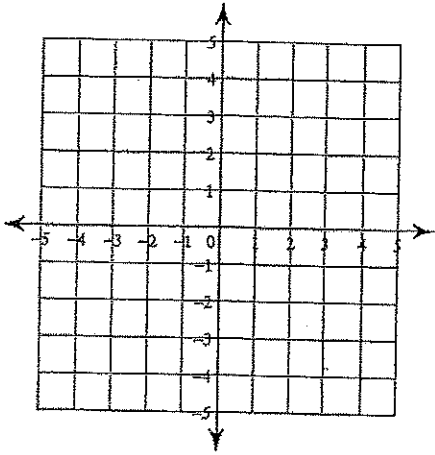
\*\* NEED TO  
SOLVE FOR  
 $mx + b$  FIRST!

5)  $x \leq -3$   
 $5x + 3y \geq -9$

6)  $4x - 3y < 9$   
 $x + 3y > 6$



7)  $x + y > 2$   
 $2x - y > 1$



8)  $x + y \geq 2$   
 $4x + y \geq -1$

