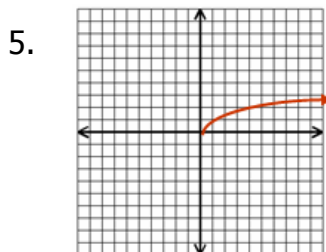
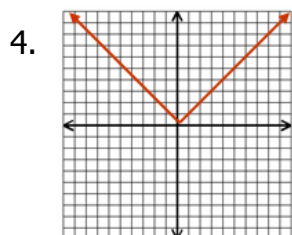
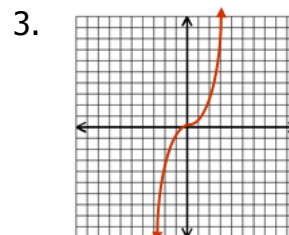
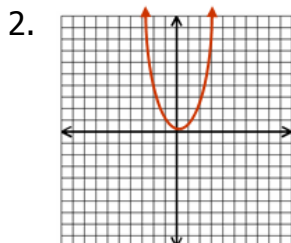
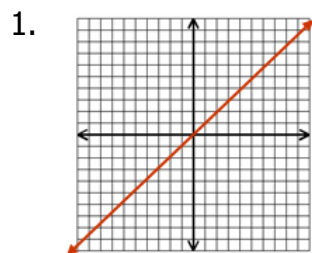


Match the name & equation to the graph.

**Names:** A) absolute value B) cubic C) linear D) quadratic E) radical

**Equations:** F)  $y = x$  G)  $y = x^2$  H)  $y = x^3$  I)  $y = |x|$  J)  $y = \sqrt{x}$



$$y = a(x-h)^2 + k$$

\_\_\_\_\_ 11) describe the effect of **a** on the graph.

\_\_\_\_\_ 12) describe the effect of **h** on the graph.

\_\_\_\_\_ 13) describe the effect of **k** on the graph.

Identify the parent function name and describe the transformation for each function.

6.  $g(x) = 3(x-1)^2 - 6$  Name: \_\_\_\_\_

Transformation: 1) \_\_\_\_\_ 2) \_\_\_\_\_ 3) \_\_\_\_\_

7.  $f(x) = 5(x-2)^3 - 11$  Name: \_\_\_\_\_

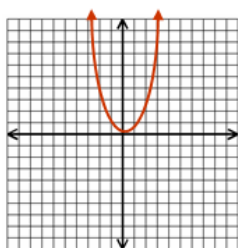
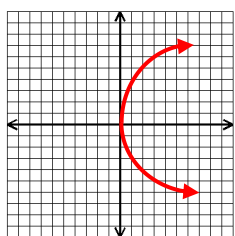
Transformation: 1) \_\_\_\_\_ 2) \_\_\_\_\_ 3) \_\_\_\_\_

8.  $h(x) = \frac{2}{3}|x+6|$  Name: \_\_\_\_\_ Transformation 1) \_\_\_\_\_ 2) \_\_\_\_\_

9.  $f(x) = x + 6$  Name: \_\_\_\_\_ Transformation 1) \_\_\_\_\_

10. What is the effect on the graph of the function  $y = x^2 + 2$  when it is changed to  $y = x^2 - 3$ ? \_\_\_\_\_

Is it a function? 11-14



x	y
-13	-1
-5	0
-2	2
0	2
1	5

x	y
-1	-1
0	0
1	1
2	2
4	5
4	7

**Is It Linear, Quadratic, or Neither?**

15.

Road Trip	
Distance Traveled	
gallons	miles
8.7	263
9.8	296
10.1	324
10.1	305
10.6	332
11.2	338
12.3	368

16.

My Heating Bills	
Temp	Amount (\$)
36	83
38	91
38	99
42	107
42	115
44	123
49	131

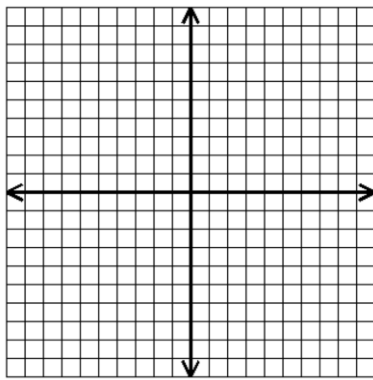
17.

x	y
-3	10
-1	-8
1	6
3	52

**Name the Parent Function. List the transformations. Graph each equation.**

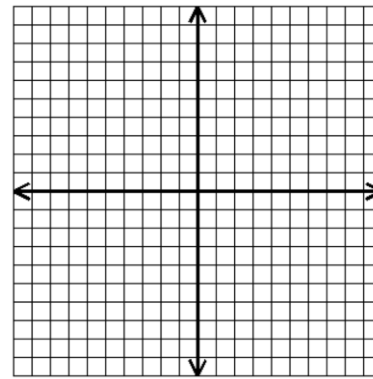
18.  $y = (x + 2)^2 - 3$

19.  $y = 2|x - 3| + 2$  1)



1)

2)

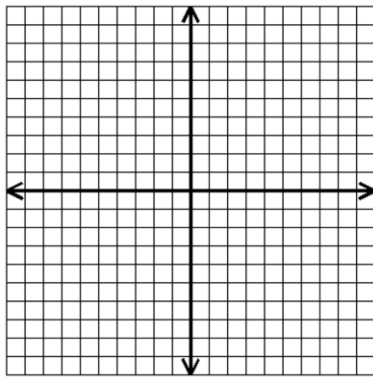


2)

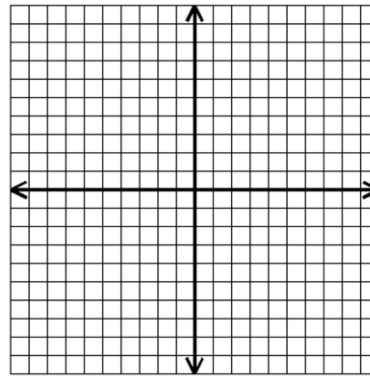
3)

20.  $y = -4x + 5$  1)

21.  $y = \sqrt{x + 5}$  1)



2)



\_\_\_\_\_ 22) Jimmy takes 5 naps per day. Is this statement Linear or Quadratic?

\_\_\_\_\_ 23) Steven shoots a rocket from the ground. Is this statement Linear or Quadratic?